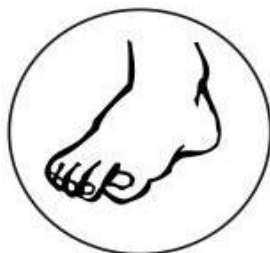
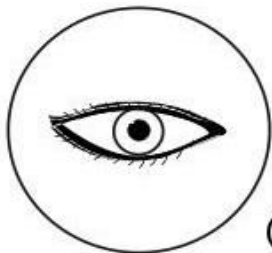

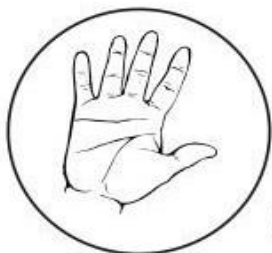






Pomenuj časti tela na obrázkoch. Spočítaj, koľko čoho máme?



Vyfarbi správny počet krúžkov podľa počtu častí tela.



MENO: _____

Vypočítaj jednoduché príklady.

$$\begin{array}{r} 56 \\ -27 \\ \hline \end{array}$$

$$\begin{array}{r} 43 \\ +17 \\ \hline \end{array}$$

$$\begin{array}{r} 81 \\ -62 \\ \hline \end{array}$$

$$\begin{array}{r} 72 \\ -25 \\ \hline \end{array}$$

$$\begin{array}{r} 36 \\ +21 \\ \hline \end{array}$$

$$\begin{array}{r} 51 \\ -43 \\ \hline \end{array}$$

$$\begin{array}{r} 58 \\ -32 \\ \hline \end{array}$$

$$\begin{array}{r} 34 \\ +35 \\ \hline \end{array}$$

$$\begin{array}{r} 78 \\ -57 \\ \hline \end{array}$$

$$\begin{array}{r} 44 \\ -16 \\ \hline \end{array}$$

$$\begin{array}{r} 27 \\ +14 \\ \hline \end{array}$$

$$\begin{array}{r} 36 \\ +51 \\ \hline \end{array}$$

$$\begin{array}{r} 38 \\ +28 \\ \hline \end{array}$$

$$\begin{array}{r} 72 \\ -64 \\ \hline \end{array}$$

$$\begin{array}{r} 95 \\ -91 \\ \hline \end{array}$$

$$\begin{array}{r} 65 \\ +36 \\ \hline \end{array}$$

$$\begin{array}{r} 25 \\ -5 \\ \hline \end{array}$$

$$\begin{array}{r} 48 \\ -39 \\ \hline \end{array}$$

$$\begin{array}{r} 43 \\ +44 \\ \hline \end{array}$$

$$\begin{array}{r} 71 \\ +11 \\ \hline \end{array}$$

$$\begin{array}{r} 91 \\ -91 \\ \hline \end{array}$$

$$\begin{array}{r} 34 \\ +46 \\ \hline \end{array}$$

$$\begin{array}{r} 83 \\ -74 \\ \hline \end{array}$$

$$\begin{array}{r} 28 \\ +49 \\ \hline \end{array}$$

$$\begin{array}{r} 17 \\ +14 \\ \hline \end{array}$$

$$\begin{array}{r} 61 \\ -51 \\ \hline \end{array}$$

$$\begin{array}{r} 36 \\ -19 \\ \hline \end{array}$$

$$\begin{array}{r} 28 \\ +28 \\ \hline \end{array}$$

